

Total No. of Questions—8]

[Total No. of Printed Pages—6

Seat No.	
-------------	--

[5252]-548

S.E. (Electrical Engineering) (Second Semester)

EXAMINATION, 2017

NETWORK ANALYSIS

(2015 PATTERN)

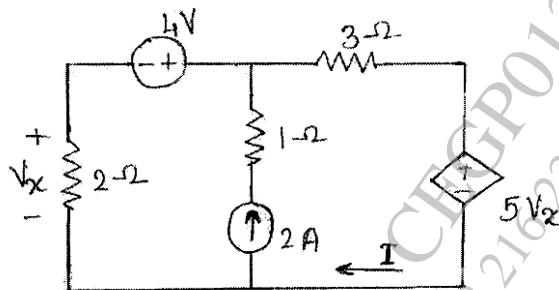
Time : Two Hours

Maximum Marks : 50

- N.B. :-** (i) Answer Q. No. 1 or Q. No. 2, Q. No. 3, or Q. No. 4, Q. No. 5 or Q. No. 6, Q. No. 7 or Q. No. 8.
(ii) Neat diagrams must be drawn wherever necessary.
(iii) Figure to the right indicate full marks.
(iv) Use of calculator is allowed.
(v) Assume suitable data, if necessary.

1. (a) Explain the following terms in relation with network graphs : [6]
(i) Tree
(ii) Cut set
(iii) Tie set.
(b) In the circuit shown, find current I, using superposition theorem.

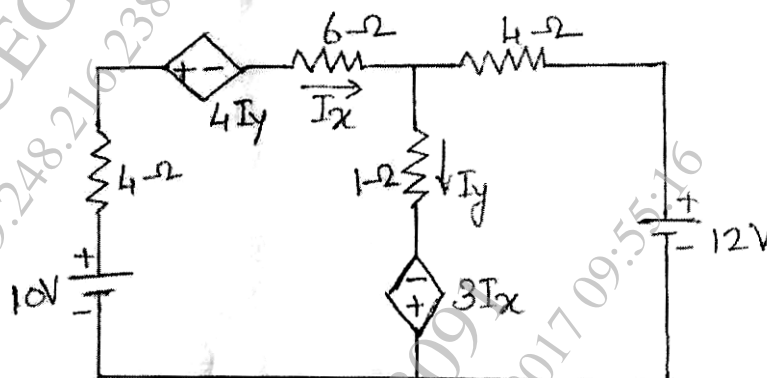
[7]



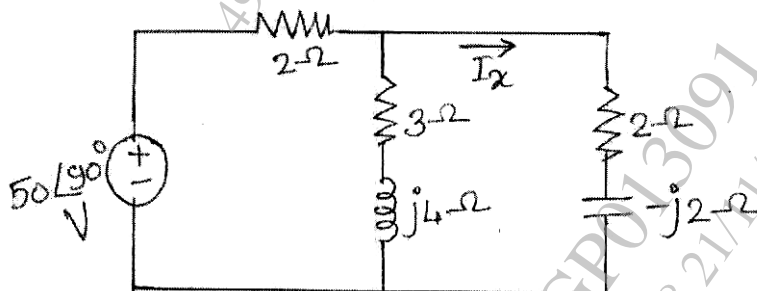
P.T.O.

Or

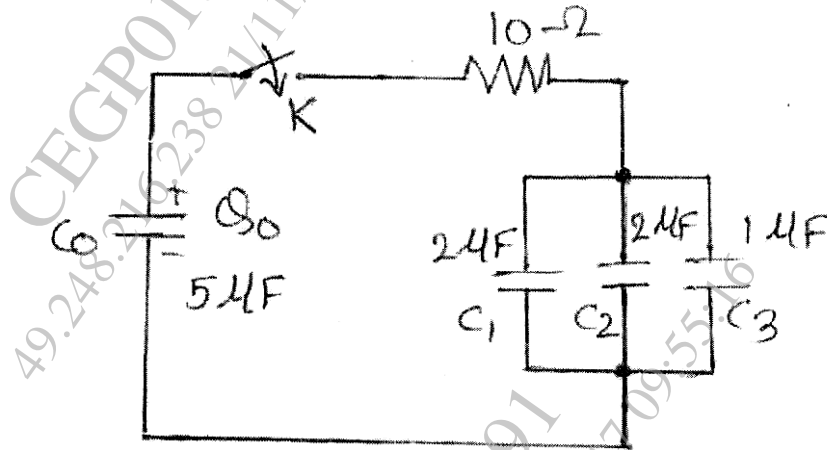
2. (a) Find current I_x and I_y for the circuit shown in figure using mesh analysis. [6]



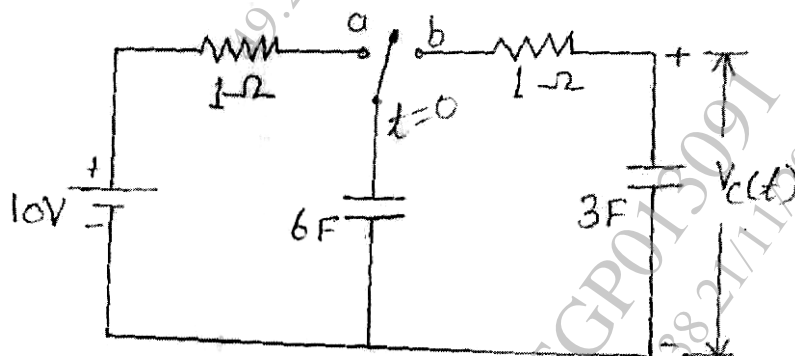
- (b) Verify the reciprocity theorem for the voltage source and current I_x for the circuit shown in figure. [7]



3. (a) A $5 \mu\text{F}$ capacitor is initially charged with $500 \mu\text{C}$. At $t = 0$, the switch K is closed. Determine the voltage drop across the resistor at $t < \tau$ and at $t = \infty$ [6]

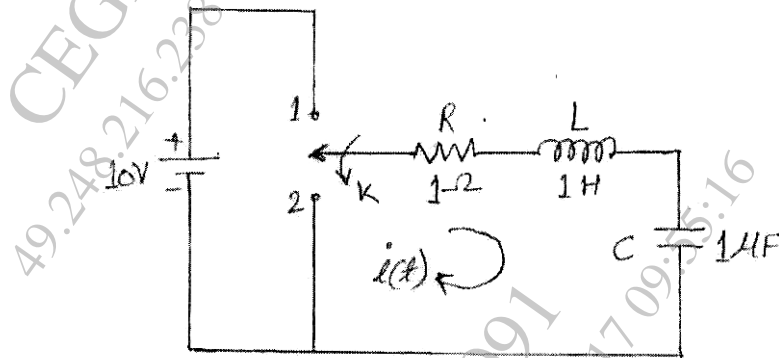


- (b) In the network shown in figure the switch is moved from position a to b at $t = 0$. Determine $i(t)$ and $V_c(t)$ using Laplace transform. [6]

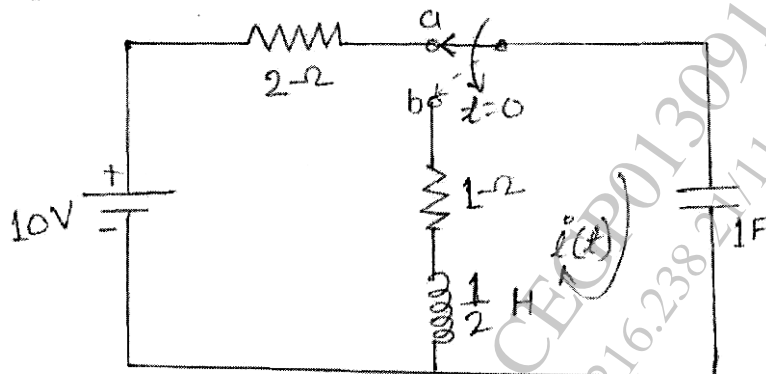


Or

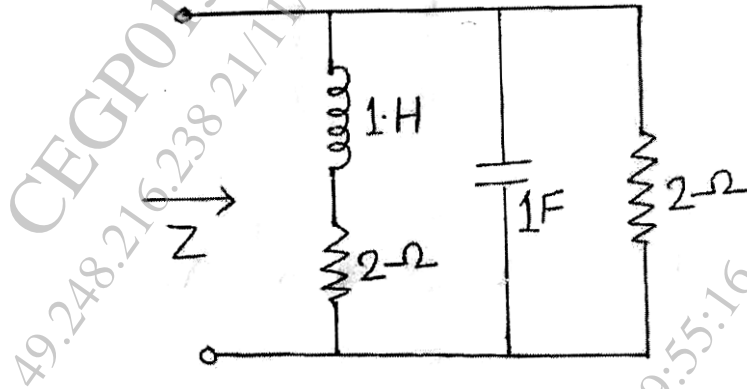
4. (a) As shown in circuit, switch K is changed from position 1 to position 2 at time $t = 0$, steady state condition reached before switching. Find I , di/dt , d^2i/dt^2 at $t = 0^+$. [6]



- (b) In the network shown in figure was in a position 'a' for long time and moved to position 'b' at $t = 0$. Find the current through the capacitor for $t > 0$ using Laplace transform. [6]

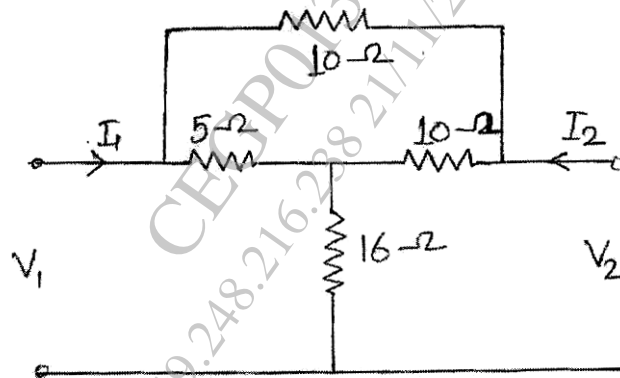


5. (a) Develop the relationship between transmission parameter and Y parameters. [6]
- (b) Find the driving point impedance for the network shown in figure. [7]

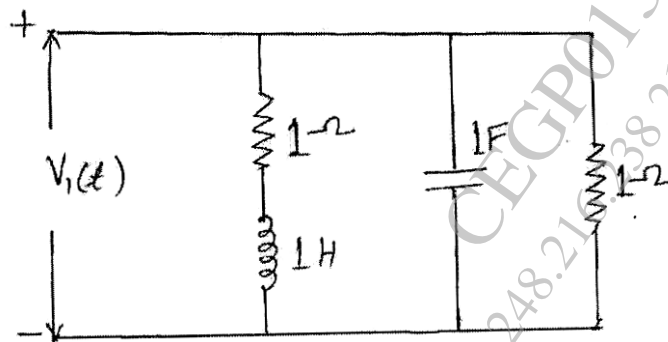


Or

6. (a) Find Z parameter of the network shown in figure. [6]



- (b) Find the driving point admittance $Y_{11}(s)$ for the network shown in figure, and plot pole zero diagram. [7]



7. (a) Explain the following terms in relation with filter : [6]

(i) Pass band

(ii) Stop band

(iii) Cut-off frequency

(b) Design a T and π section Constant-K high pass filter having cut-off frequency of 12 kHz and nominal impedance $R_0 = 500\Omega$.

Also find :

[6]

(i) its characteristic impedance and phase constant at 24 kHz and

(ii) attenuation at 4 kHz

Or

8. (a) Derive the expression for characteristic impedance (Z_0), attenuation constant (α) and phase constant (β) of prototype constant-K type low pass filter from symmetrical networks. [6]

(b) Design constant -K high pass filter T and π section having $f_c = 5$ kHz and nominal characteristic impedance $R_0 = 600 \Omega$.

[6]