

22324

23124

3 Hours / 70 Marks

Seat No.

--	--	--	--	--	--	--	--

- Instructions* –
- (1) All Questions are *Compulsory*.
 - (2) Answer each next main Question on a new page.
 - (3) Illustrate your answers with neat sketches wherever necessary.
 - (4) Figures to the right indicate full marks.
 - (5) Assume suitable data, if necessary.
 - (6) Use of Non-programmable Electronic Pocket Calculator is permissible.
 - (7) Mobile Phone, Pager and any other Electronic Communication devices are not permissible in Examination Hall.

Marks

- 1. Attempt any FIVE of the following: **10****
- a) Draw power triangle for R-C series circuit. State the nature of power factor of this circuit.
 - b) State relationship between line and phase values of voltage and current in balanced delta connection.
 - c) Define Reactive Power and Active Power and state its unit.
 - d) Define Conductance and Susceptance related to AC circuit and state their units.
 - e) Distinguish between loop and mesh.
 - f) State the value of internal resistance of
 - i) Ideal Voltage Source and
 - ii) Ideal current Source
 - g) State Norton's Theorem

P.T.O.

2. Attempt any THREE of the following: 12

a) With neat diagram, explain the phasor representation of sinusoidal quantity.

b) An AC circuit consists of two branches in parallel.

Branch I : $R = 10\Omega$ and $L = 0.1\text{H}$ in series

Branch II : $C = 50\mu\text{f}$

If the circuit is supplied from 200V, 50HZ supply

Calculate :-

i) Branch impedances

ii) Branch Currents

iii) Circuit Power factor

iv) Power consumed by Ckt

c) With the help of neat phasor diagram, derive the relationship between line and phase values of voltage in balanced star connection.

d) State the equivalent delta connection for star connection of three resistances R_1 , R_2 and R_3 , with proper equations.

3. Attempt any THREE of the following: 12

a) For series R-L-C circuit, draw neat circuit diagram. State the conditions for RLC series ckt. Draw phasor diagram and voltage triangle impedance triangle for any 1 condition.

b) State any four properties of Parallel Resonance.

c) With neat labelled diagram, explain unbalanced star connected load.

d) With neat circuit diagram, explain how to convert a practical voltage source into an equivalent practical current source.

e) Explain the concept of “duality” in electric circuit with one example.

4. Attempt any THREE of the following:

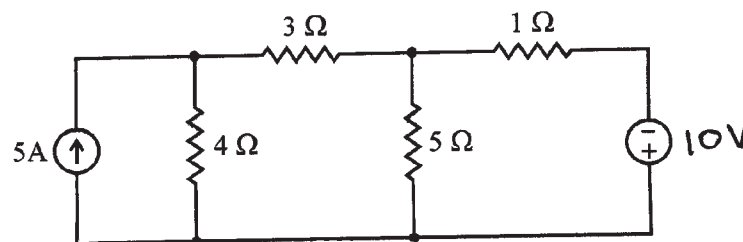
12

- a) A series R-L-C circuit has $R = 5\Omega$, $L = 10\text{mH}$ and $C = 15\mu\text{F}$. Calculate
- Resonant frequency
 - Q-factor of the circuit
 - Bandwidth
 - Voltage magnification
- b) Explain the “Current Magnification” in parallel resonant circuit consisting of inductive branch (RL) in parallel with a pure capacitor (C). Derive equation for it.
- c) Draw waveform of three-phase voltages. Draw phasor diagram for these voltages. Write equations for instantaneous values of these voltages. Express these voltages in polar form.
- d) State and explain “Reciprocity theorem”.

5. Attempt any TWO of the following:

12

- a) A coil having resistance of 5Ω and an inductance of 0.2H is connected in parallel with a series combination of 10Ω resistor and $80\mu\text{F}$ capacitor. If supply voltage is 230V , 50Hz , determine :
- Total circuit impedance
 - Total current taken by the circuit
 - Power factor of the circuit
 - Branch currents
 - Power consumed by the circuit
- b) Using mesh analysis, find current in 5Ω resistor in the network shown in Fig. No. 1.

Fig. No. 1

P.T.O.

- c) For the network shown in Fig. No. 2 below, determine value of R so that maximum power is delivered to it. Also compute the maximum power delivered.

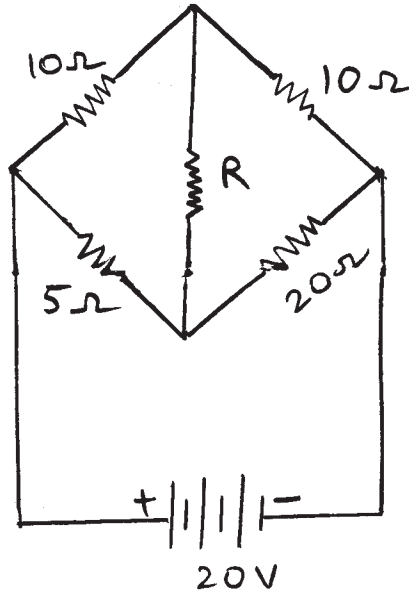


Fig. No. 2

6. Attempt any TWO of the following: 12

- a) For a series R-L-C circuit consisting of $R = 5\Omega$, $L = 0.01\text{H}$ and $C = 10\mu\text{F}$ supplied with 230 V, 50 Hz supply, determine -
- i) Circuit impedance
 - ii) Circuit current
 - iii) Circuit power factor
 - iv) Active power
 - v) Reactive power
 - vi) Apparent power

- b) A star connected capacitive load is supplied from 3 Phase, 415 V, 50 Hz supply. If the line current is 15 A and total 3 phase power taken from supply is 30 kW, Find
- Power factor
 - Resistance in each phase
 - Capacitance in each phase
- c) Determine the voltage 'V' across 5Ω resistor in network shown in Fig. No. 3 using superposition theorem.

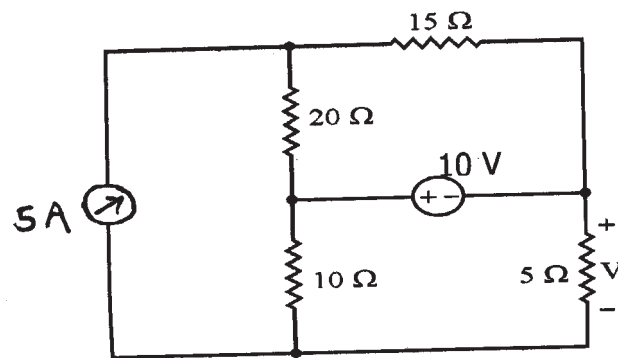


Fig. No. 3
