

22303

11920

3 Hours / 70 Marks

Seat No.

--	--	--	--	--	--	--	--

- Instructions :**
- (1) All Questions are *compulsory*.
 - (2) Illustrate your answers with neat sketches wherever necessary.
 - (3) Figures to the right indicate full marks.
 - (4) Assume suitable data, if necessary.
 - (5) Use of Non-programmable Electronic Pocket Calculator is permissible.
 - (6) Mobile Phone, Pager and any other Electronic Communication devices are not permissible in Examination Hall.

Marks

1. **Attempt any FIVE of the following :** **10**
 - (a) Define Hook's law with expression.
 - (b) Write down formula of M-I of quarter circle about its centroidal axes.
 - (c) Define modulus of rigidity and bulk modulus.
 - (d) Define stress and strain.
 - (e) Write Euler's and Rankine's formula with meaning of each term.
 - (f) Define shear force & bending moment.
 - (g) Give relation between average and maximum shear stress for rectangular and circular cross-section.

2. **Attempt any THREE of the following :** **12**
 - (a) State parallel axis theorem and perpendicular axis theorem.
 - (b) Determine M-I about both axes for a Hollow rectangular section having 150 mm width and 90 mm depth.

- (c) Calculate the moment of inertia of a L-section about the XX axis passing through the centre of gravity for a section as shown in fig. No. 1.

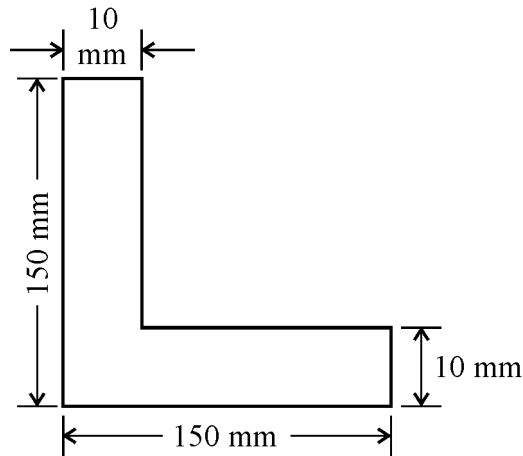


Fig. 1

- (d) Calculate the M-I @ YY axis for following section.

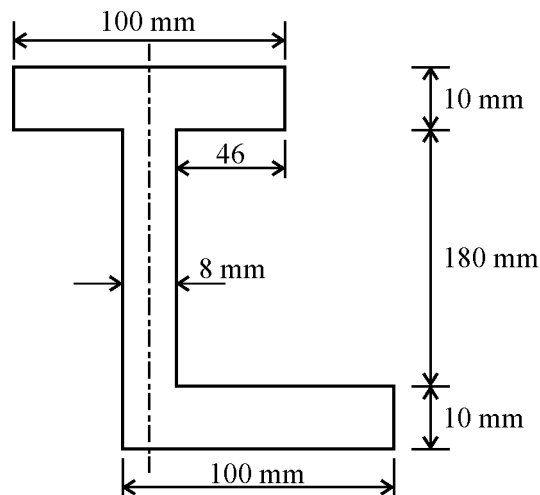


Fig. 2

3. Attempt any THREE of the following :

12

- (a) A steel rod 20 mm in diameter 1.2 m long is heated through 120°C and at the same time subjected to a pull 'P' if the total extension of the rod is 3 mm calculate the magnitude of 'P', take $\alpha = 12 \times 10^{-6}/^\circ\text{C}$ and $E = 200 \text{ GPa}$.

- (b) A bar having cross-section as given in fig. No.3 is subjected to a tensile load of 150 kN calculate the change in length of each part along with the total change in length if $E = 2 \times 10^5 \text{ N/mm}^2$.

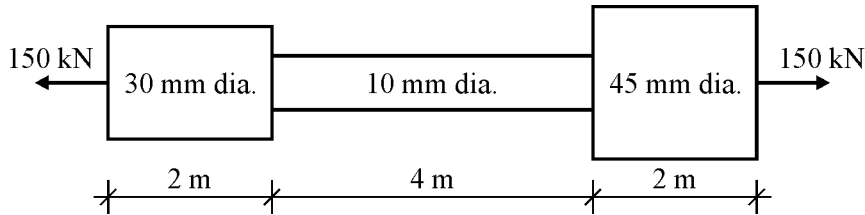


Fig. 3

- (c) A reinforced concrete column is $300 \text{ mm} \times 300 \text{ mm}$ in section, reinforced with 8 bars of 20 mm diameter. The column carries a load of 360 kN. Find the stresses in concrete and steel bars.
Take $E_{st} = 2.1 \times 10^5 \text{ N/mm}^2$
 $E_{con.} = 1.4 \times 10^4 \text{ N/mm}^2$.
- (d) A circular bar of 25 mm diameter and 3.5 m long is subjected to a tensile load of 40 kN. shows an elongation of 60 mm. Determine stress, strain & modulus of elasticity.

4. Attempt any THREE of the following :

12

- (a) For a given material $E = 110 \text{ GPa}$, $G = 43 \text{ GPa}$ find K & μ .
- (b) In a biaxial stress system, the stresses along the two directions are $\sigma_x = 50 \text{ N/mm}^2$ & $\sigma_y = 30 \text{ N/mm}^2$ both tensile. Determine the strains along these two directions. $E = 2 \times 10^5 \text{ N/mm}^2$ & Poisson's ratio = 0.3.
- (c) State relation between E , G & K with expressions.
- (d) Draw SF & BM diagram for the cantilever beam as shown in fig. No. 4

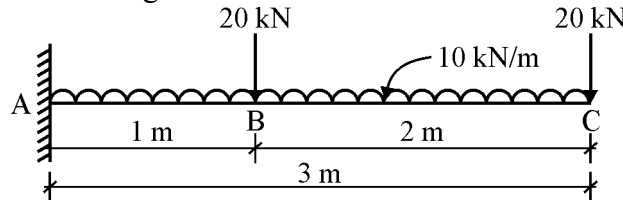


Fig. 4

- (e) State four assumptions made in Euler's theory.

5. Attempt any TWO of the following :

12

- (a) Draw the shear force & bending moment diagrams for the beam as shown in fig. No. 5

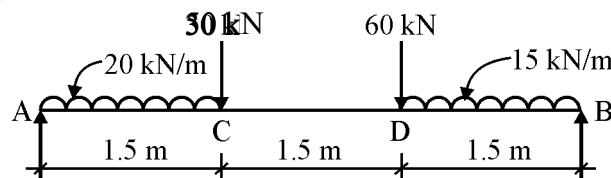


Fig. 5

- (b) Draw S.F. & B.M. diagram for overhanging beam as shown in fig. No.6

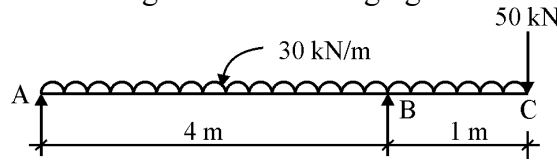


Fig. 6

- (c) Draw SF & B.M. diagram for the beam as shown in fig. No. 7

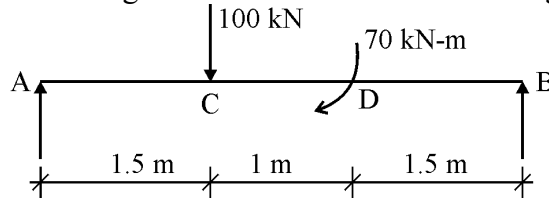


Fig. 7

6. Attempt any TWO of the following :

12

- (a) Solve the following :

- (i) Determine by Rankine's formula the safe load on the column of 5.5 m length, with both ends fixed, can carry with a factor of safety 4. The properties of section are $A = 1777 \text{ mm}^2$.

$$I_{XX} = 11.6 \times 10^8 \text{ mm}^4, I_{YY} = 0.84 \times 10^8 \text{ mm}^4, \sigma_C = 320 \text{ N/mm}^2, \alpha = \frac{1}{7500}$$

- (ii) A simply supported beam has span 7 m carries a point load of 50 kN at the centre of the beam. Calculate the modulus of section if bending stress is not to exceed 140 MPa. With distribution diagram of stress.

- (b) A cantilever is 2 m long and is subjected to a udl of 5 kN/m. The c/s of a cantilever is a I-section as shown in Fig. No. 8. Determine the maximum tensile and compressive stress developed and their position, showing stress distribution diagram.

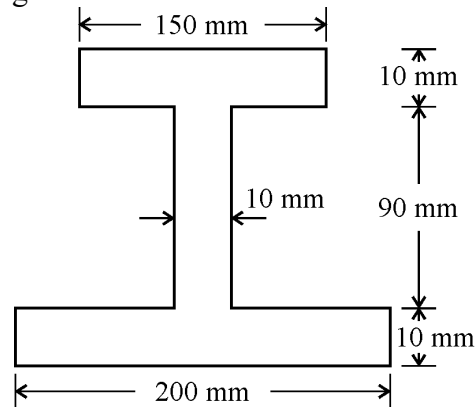


Fig. 8

- (c) A T-Section beam having flange 180 mm wide and 20 mm thick and web 150 mm long & 20 mm thick carries a udl of 80 kN/m over an effective span of 8 m. Calculate the maximum bending stress.